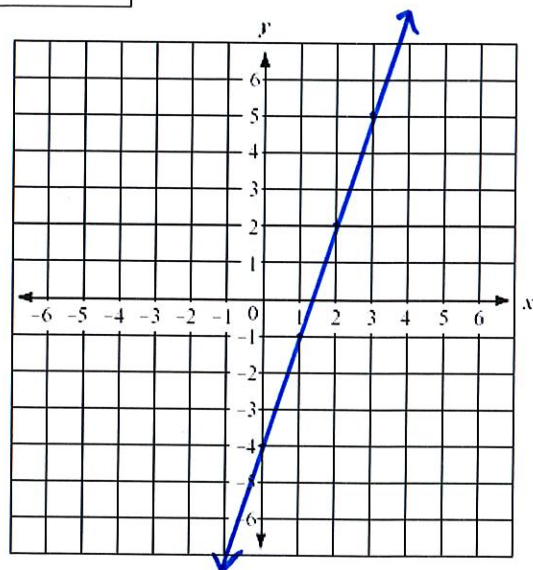
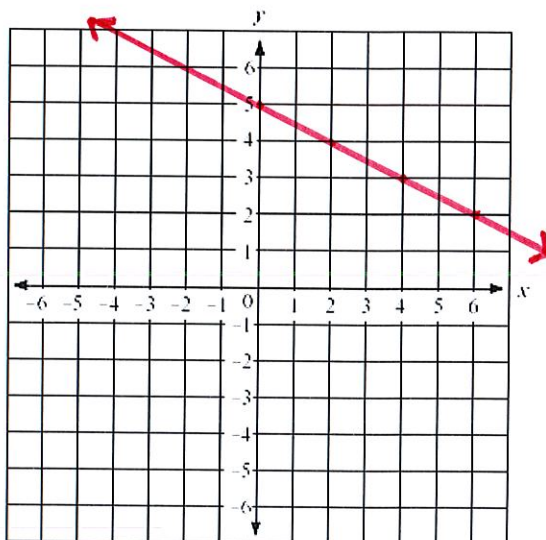


Name: _____

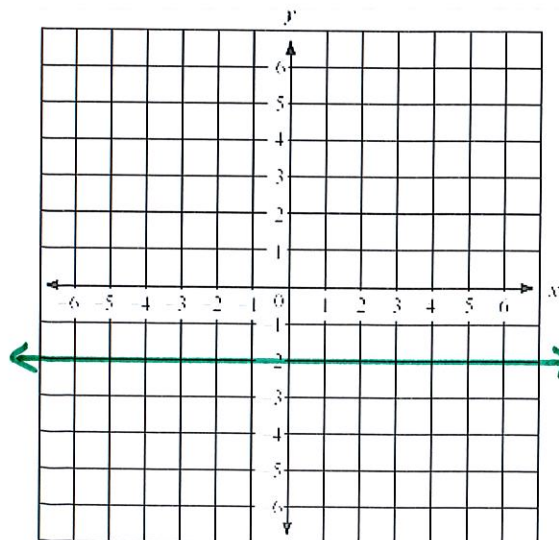
1. Given the line shown, write an equation in slope-intercept form $y = mx + b$ first, then convert the equation to standard form $Ax + By = C$



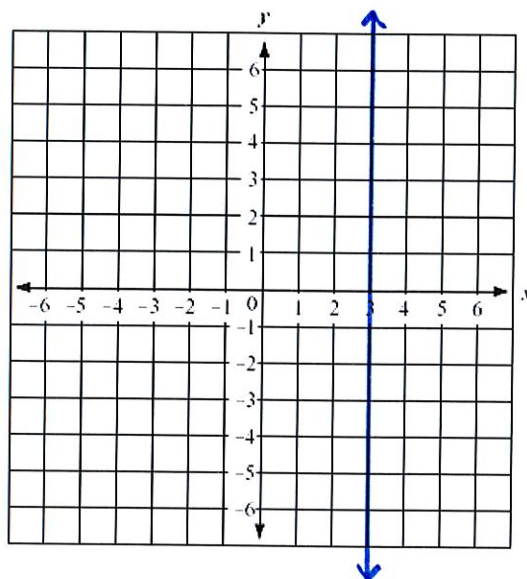
2. Given the line shown, write an equation in slope-intercept form $y = mx + b$ first, then convert the equation to standard form $Ax + By = C$



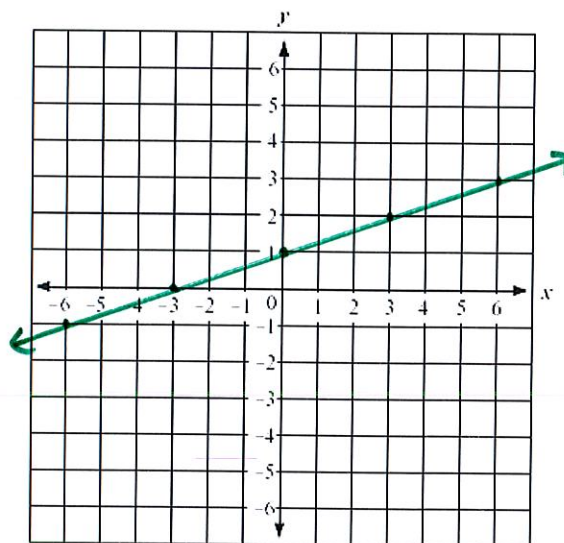
3. Given the line shown, write an equation in slope-intercept form $y = mx + b$ first, then convert the equation to standard form $Ax + By = C$



4. Given the line shown, write an equation in slope-intercept form $y = mx + b$ first, then convert the equation to standard form $Ax + By = C$



5. Given the line shown, write an equation in slope-intercept form $y = mx + b$ first, then convert the equation to standard form $Ax + By = C$



6. Given the line shown, write an equation in slope-intercept form $y = mx + b$ first, then convert the equation to standard form $Ax + By = C$

Do not estimate the y-intercept.

